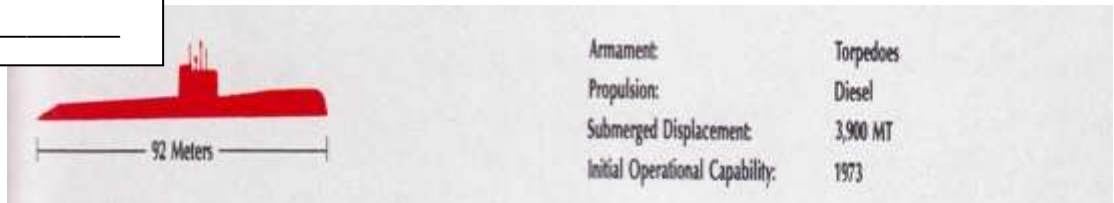


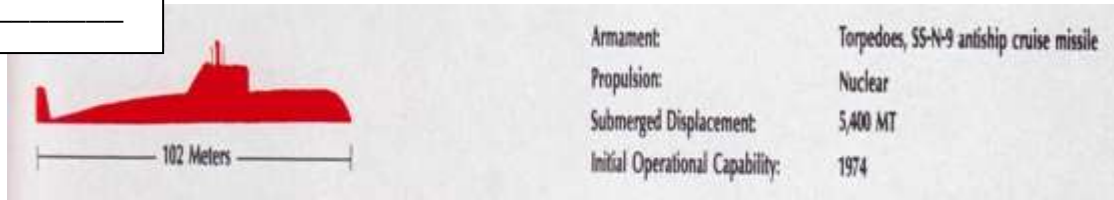
Name \_\_\_\_\_ Period \_\_\_\_\_ Date \_\_\_\_\_

Directions: Using the Dichotomous Key of Soviet Attack Submarines identify each of the following Cold War era Soviet submarines. Write the class of the sub in the space provided.  
(Version A)


Sub #1 \_\_\_\_\_



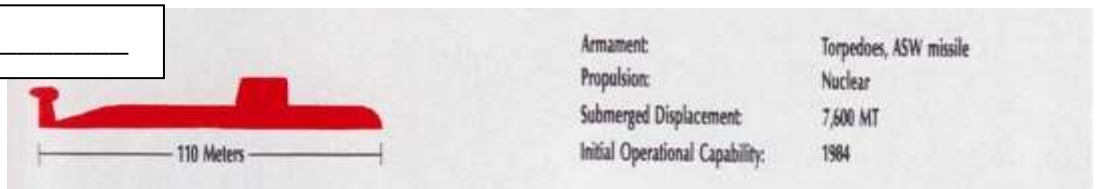
Sub #2 \_\_\_\_\_



Sub #3 \_\_\_\_\_



Sub #4 \_\_\_\_\_



Sub #5 \_\_\_\_\_

